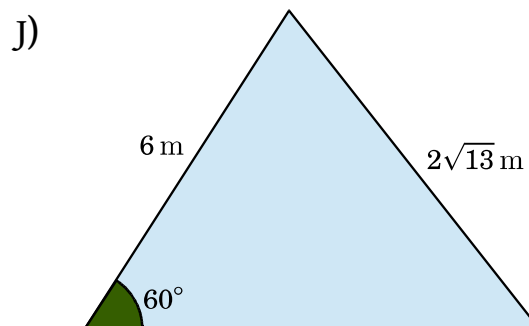
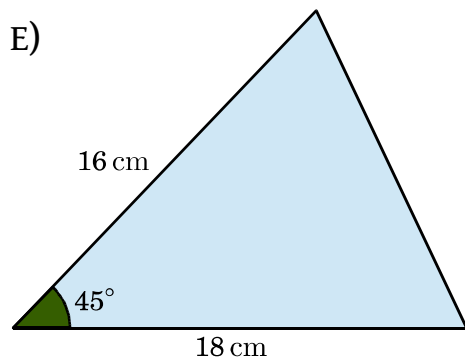
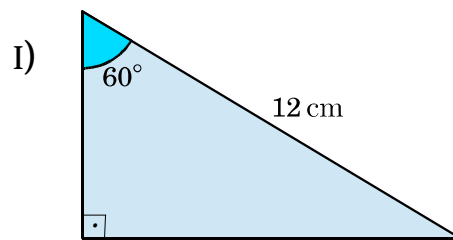
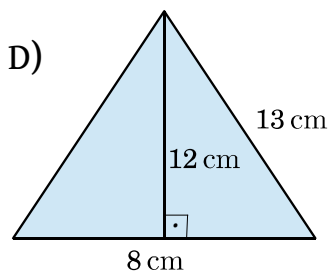
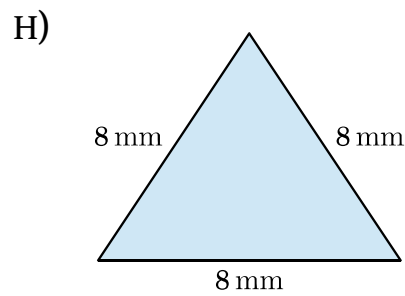
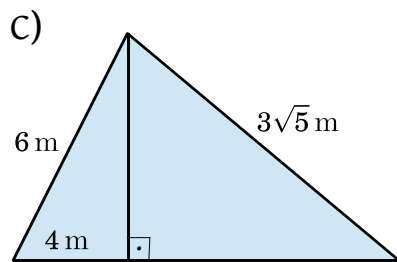
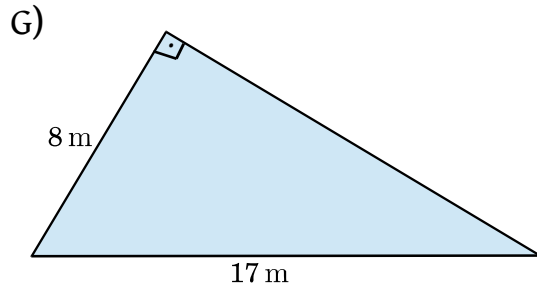
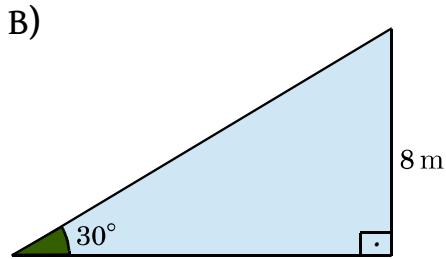
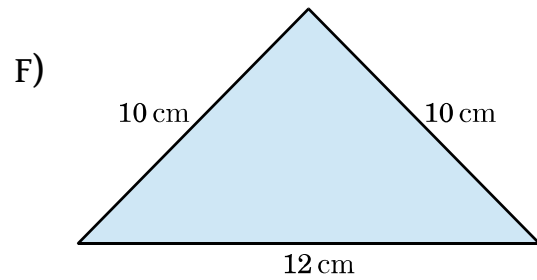
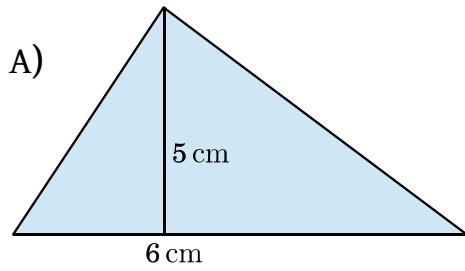


# Área de Triângulos – Exercícios Complementares

01. Determine a área de cada figura.



GABARITO: A)  $15 \text{ cm}^2$  B)  $32\sqrt{3} \text{ cm}^2$  C)  $9\sqrt{5} \text{ m}^2$  D)  $48 \text{ cm}^2$  E)  $72\sqrt{2} \text{ cm}^2$  F)  $48 \text{ cm}^2$  G)  $60 \text{ m}^2$  H)  $16\sqrt{3} \text{ mm}^2$  I)  $18\sqrt{3} \text{ cm}^2$  J)  $12\sqrt{3} \text{ m}^2$